



UNIVERSITY OF CAMBRIDGE INTERNATIONAL EXAMINATIONS
General Certificate of Education Advanced Subsidiary Level and Advanced Level

GEOGRAPHY

9696/22

Paper 2 Advanced Physical Options

May/June 2013

INSERT

1 hour 30 minutes

READ THESE INSTRUCTIONS FIRST

The Insert contains all the Figures and the Photographs referred to in the questions.

This document consists of **5** printed pages and **3** blank pages.

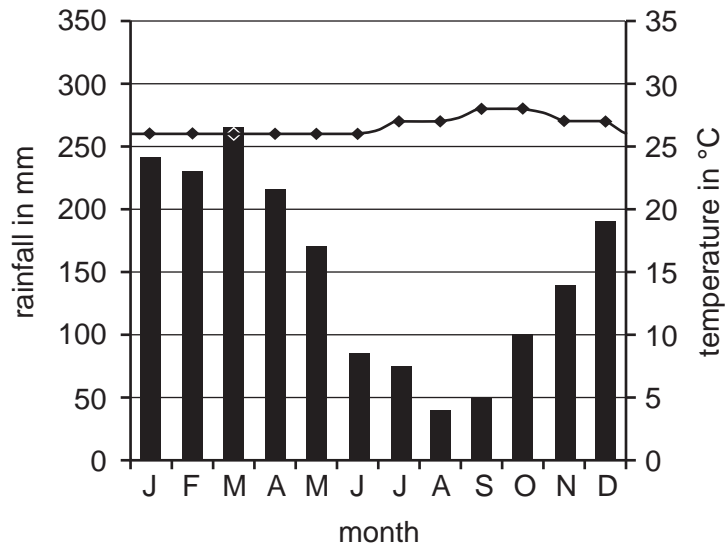


Fig. 1 for Question 2

Climate graphs for humid and seasonally humid tropical areas

A Humid tropical

Annual climate Manaus, Brazil (latitude 3°S)



B Seasonally humid tropical

Annual climate Kano, Nigeria (latitude 12°N)

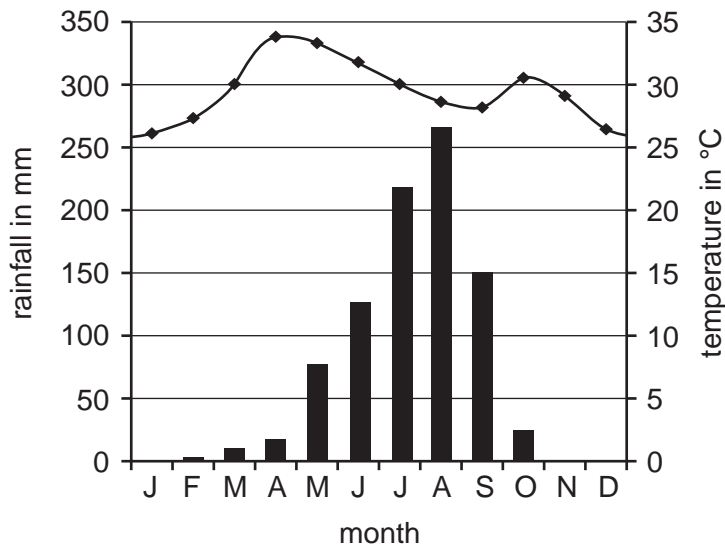


Fig. 2 for Question 4

An area of tidal sedimentation and coastal salt marsh

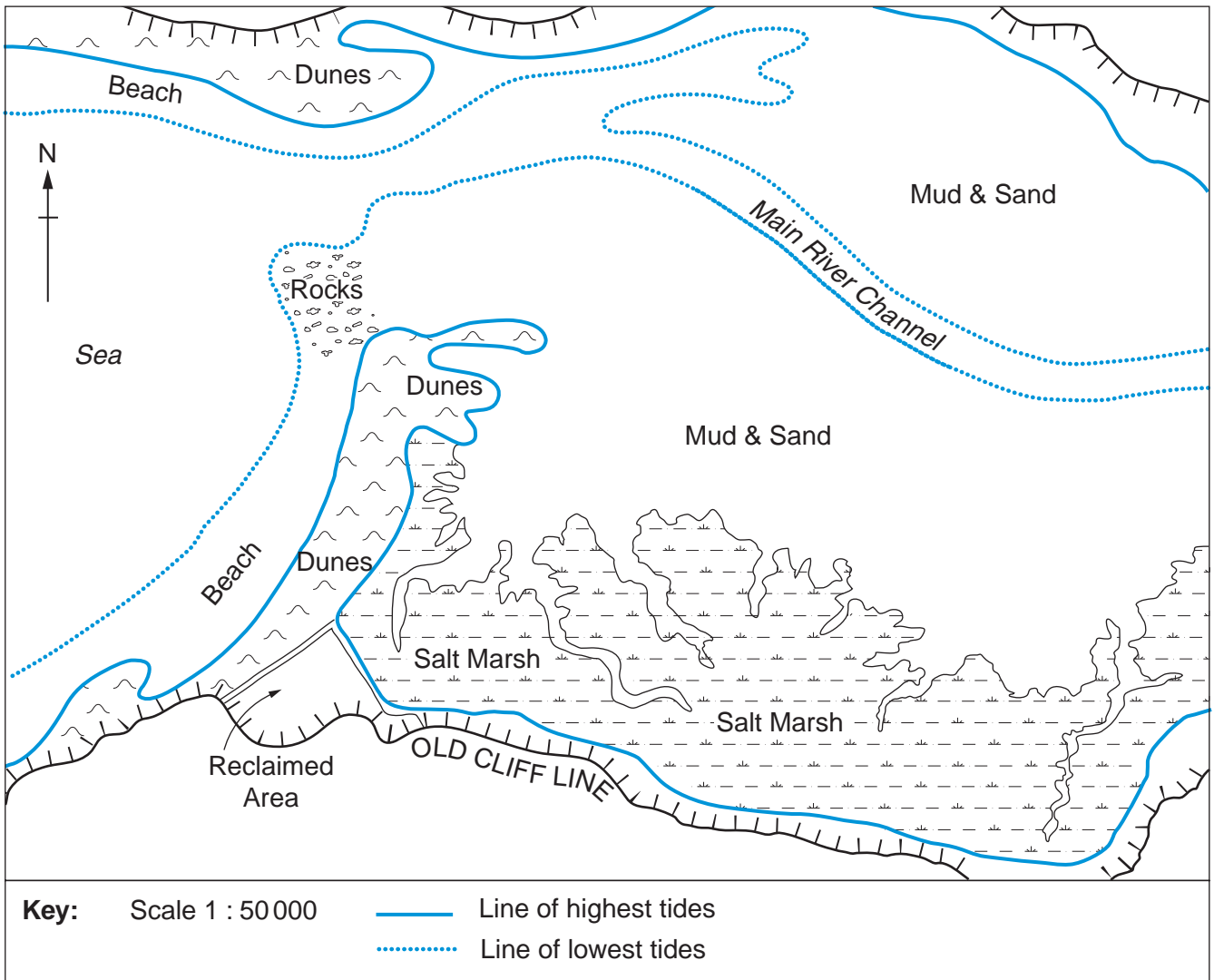
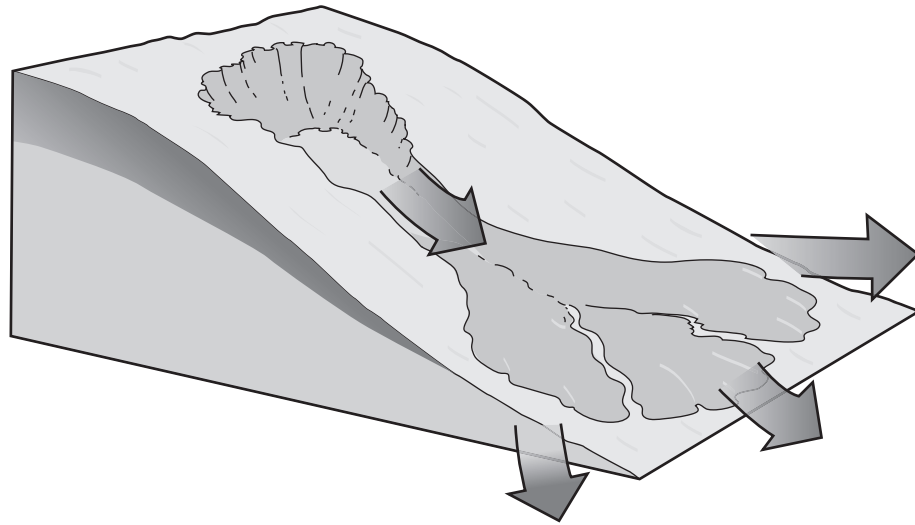


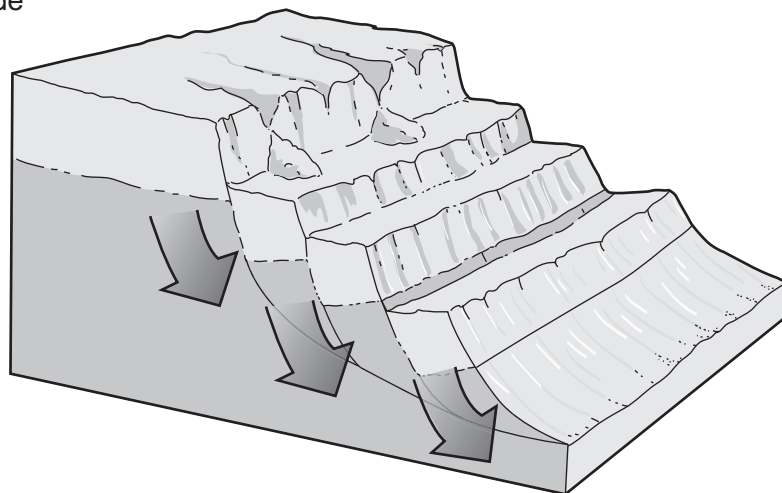
Fig. 3 for Question 5

Two types of mass movement affecting slopes

Mudflow



**Slump -
Rotational Slide**



5

Photographs A and B for Question 8

Desert landforms

Photograph A



Photograph B



BLANK PAGE

BLANK PAGE

BLANK PAGE

Permission to reproduce items where third-party owned material protected by copyright is included has been sought and cleared where possible. Every reasonable effort has been made by the publisher (UCLES) to trace copyright holders, but if any items requiring clearance have unwittingly been included, the publisher will be pleased to make amends at the earliest possible opportunity.

University of Cambridge International Examinations is part of the Cambridge Assessment Group. Cambridge Assessment is the brand name of University of Cambridge Local Examinations Syndicate (UCLES), which is itself a department of the University of Cambridge.